





Week 7 — Day 1




Draw lines to match the boxes with the same number of cats.




1




2











3



4



5



Today I scored out of 5.

Week 7 — Day 2

Circle the bigger amount.

2 ml

6 ml



①

2 ml

4 ml

⑥

9 ml

19 ml

②

5 ml

1 ml



⑦

3 ml

12 ml

③

6 ml

3 ml

⑧

10 ml

7 ml

④

2 ml

9 ml

⑨

11 ml

17 ml



⑤

8 ml

7 ml

⑩

15 ml

10 ml



Today I scored

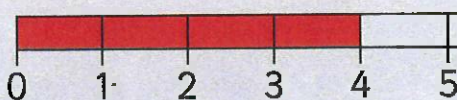
out of 10.



Week 7 — Day 3

Fill in the answer.

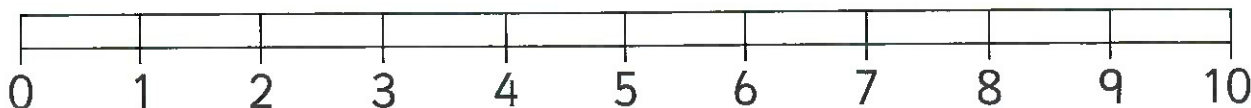
Colour in the number line
to help you.



$$2 + 2 = \boxed{4}$$

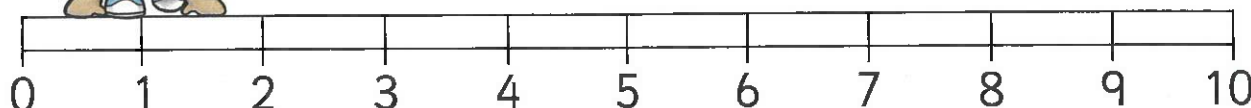


1



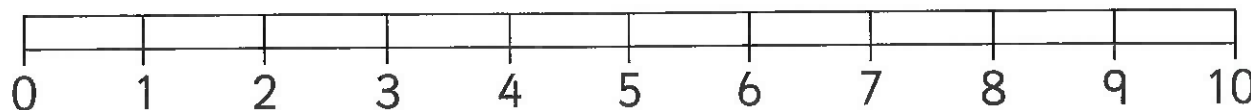
$$2 + 1 = \boxed{3}$$

2



$$3 + 2 = \boxed{5}$$

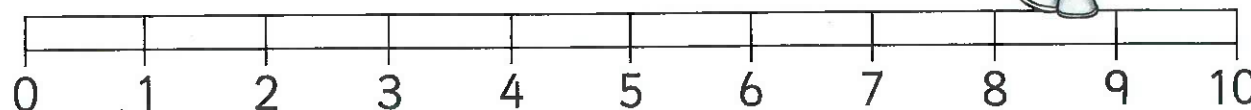
3



$$5 + 3 = \boxed{8}$$

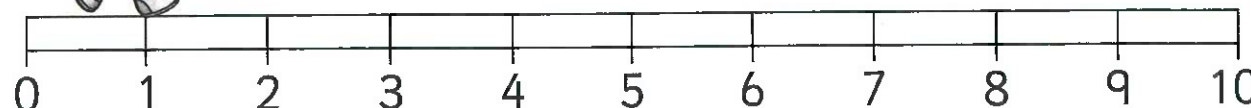


4



$$6 + 4 = \boxed{10}$$

5



$$2 + 7 = \boxed{9}$$



Today I scored out of 5.











Week 7 — Day 4


Add up the amounts of money.



2 p



1		<input type="text" value="4 p"/>	6		<input type="text" value="11 p"/>
2		<input type="text" value="3 p"/>	7		<input type="text" value="15 p"/>
3		<input type="text" value="7 p"/>	8		<input type="text" value="3 p"/>
4		<input type="text" value="6 p"/>	9		<input type="text" value="7 p"/>
5		<input type="text" value="10 p"/>	10		<input type="text" value="4 p"/>




Today I scored out of 10.



Week 7 — Day 5

Write the numbers in order.
Start with the biggest number.

3	2	5
5	3	2



1


2	3	4
4	3	2

5

4	7	8
8	7	4

2

5	1	4
5	4	1



6	7	5
7	6	5

3

4	6	2
6	4	2

7

9	6	7
9	7	6



4

3	1	6
6	3	1

8

8	9	5
9	8	5



Today I scored out of 8.



Week 8 — Day 1

Fill in the missing number.

6 is one less than 7.



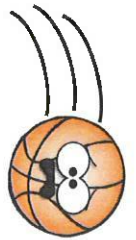
1 4 is one more than 3.



6 7 is one more than 6.

2 2 is one less than 3.

7 4 is one less than 5.



3 2 is one more than 1.

8 8 is one more than 7.

4 3 is one less than 4.



9 8 is one less than 9.

5 9 is one more than 8.



10 9 is one less than 10.


Today I scored out of 10.



Week 8 — Day 2

Write the answer
to the sum.

$1 + 3 =$



① $1 + 1 =$

⑥ $6 + 1 =$

② $2 + 3 =$



⑦ $5 + 4 =$

③ $4 + 1 =$




⑧ $2 + 6 =$

④ $3 + 5 =$



⑨ $5 + 5 =$

⑤ $4 + 2 =$



⑩ $7 + 3 =$

Today I scored out of 10.



Week 8 — Day 3

Fill in the
missing number.

5 subtract 3 is

2



① 3 subtract 1 is

2

⑥ 6 subtract 3 is

3

② 4 subtract 2 is

2

⑦ 9 subtract 4 is

5

③ 5 subtract 4 is

1

⑧ 8 subtract 5 is

3

④ 4 subtract 3 is

1

⑨ 9 subtract 7 is

2

⑤ 7 subtract 3 is

4

⑩ 10 subtract 5 is


5



Today I scored out of 10.

Week 8 — Day 4

Use + and =
to complete
the sum.



$$2 \boxed{+} 1 \boxed{=} 3$$



$$6 \boxed{=} 3 \boxed{+} 3$$

1




$$1 \boxed{+} 1 \boxed{=} 2$$

2



$$3 \boxed{+} 2 \boxed{=} 5$$

3




$$4 \boxed{=} 2 \boxed{+} 2$$

4



$$6 \boxed{+} 3 \boxed{=} 9$$

5



$$7 \boxed{=} 4 \boxed{+} 3$$

6




$$10 \boxed{=} 3 \boxed{+} 7$$



Today I scored out of 6.

Week 8 — Day 5


Circle the animal there are more of.



cats

dogs


1



rabbits

sheep


2



fish

mice


3



pigs

rabbits


4



mice

dogs


5



fish



sheep

6



lions

pigs



Today I scored out of 6.