


Week 9 — Day 1

Fill in the answer.


$$8 - 3 = \boxed{5}$$



$$\textcircled{1} \quad 7 - 4 = \boxed{3}$$

$$\textcircled{6} \quad 5 + 2 = \boxed{7}$$

$$\textcircled{2} \quad 9 - 1 = \boxed{8}$$



$$\textcircled{7} \quad 6 - 3 = \boxed{3}$$



$$\textcircled{3} \quad 3 + 1 = \boxed{4}$$

$$\textcircled{8} \quad 2 + 7 = \boxed{9}$$



$$\textcircled{4} \quad 8 - 2 = \boxed{6}$$

$$\textcircled{9} \quad 8 + 4 = \boxed{12}$$

$$\textcircled{5} \quad 4 + 5 = \boxed{9}$$



$$\textcircled{10} \quad 13 - 2 = \boxed{11}$$


Today I scored out of 10.



Week 9 — Day 2

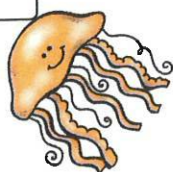
Fill in the gap
with 'less' or 'more'.

4 is **less** than 5.



① 2 is **less** than 4. ⑥ 1 is **less** than 6.


② 7 is **more** than 1. ⑦ 6 is **less** than 8.



③ 3 is **more** than 2. ⑧ 5 is **more** than 3.

④ 8 is **less** than 9. ⑨ 3 is **less** than 7.

⑤ 6 is **more** than 3. ⑩ 9 is **more** than 5.



Today I scored out of 10.

Week 9 — Day 3

Circle the plate with more cupcakes.

1 6

2 7

3 8

4 9

5 10




Today I scored out of 10.

Week 9 — Day 4

Circle the number that is double the number in the star. Use the pictures to help you.




1



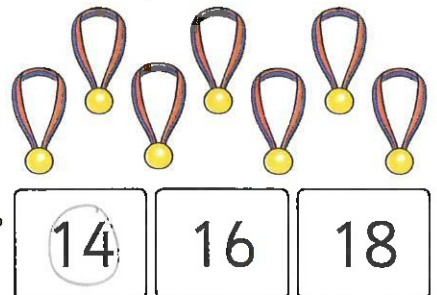
5




2



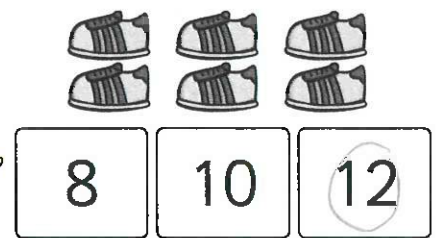
6



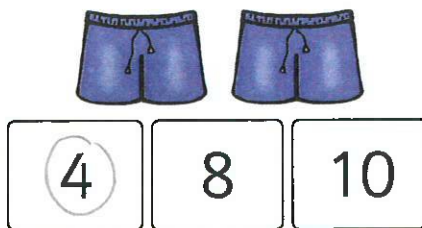
3




7



4



8




Today I scored out of 8.



Week 9 — Day 5

The number of zebras is one more than the number of lions. What is the number of zebras?



5




1




4

6




11

2




7

7




3

3



10

8




8

4




2

9




9

5



6

10





7

Today I scored out of 10.





Week 10 — Day 1

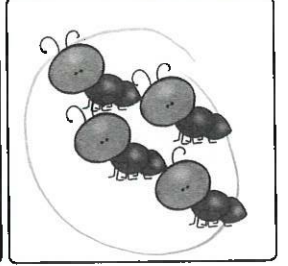

Circle the group with fewer animals.



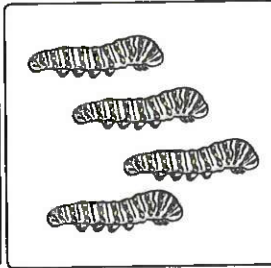
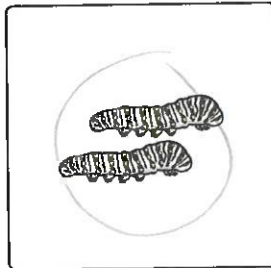
1





6





2





7





3



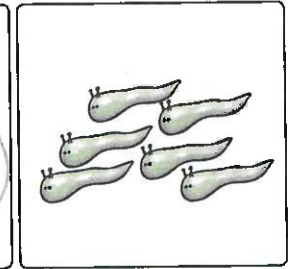
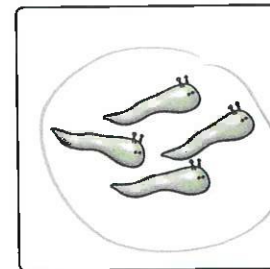
8





4





9



5



10



Today I scored out of 10.

Week 10 — Day 2

Work out the sum.

$2 + 4 = \boxed{6}$




$① \quad 3 + 2 = \boxed{5}$

$⑥ \quad 10 + 1 = \boxed{11}$

$② \quad 5 + 1 = \boxed{6}$

$⑦ \quad 10 + 0 = \boxed{10}$




$③ \quad 8 + 2 = \boxed{10}$

$⑧ \quad 8 + 3 = \boxed{11}$

$④ \quad 4 + 7 = \boxed{11}$

$⑨ \quad 3 + 0 = \boxed{3}$



$⑤ \quad 8 + 8 = \boxed{16}$

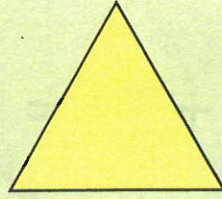
$⑩ \quad 9 + 5 = \boxed{14}$

Today I scored out of 10.




Week 10 — Day 3

How many vertices does this shape have?



3




1




4

6




6

2



3

7




4

3



4

8




3

4



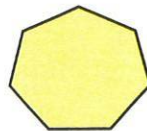
5

9




6

5



7

10



8

Today I scored out of 10.



Week 10 — Day 4

Fill in the answer. 5 add 3 equals

8



① 4 add 5 equals

9

⑥ 6 add 8 equals

14

② 9 add 2 equals

11

⑦ 11 add 5 equals

16

③ 4 add 10 equals

14

⑧ 11 add 9 equals

20

④ 12 add 2 equals

14

⑨ 13 add 2 equals

15

⑤ 8 add 4 equals

12

⑩ 12 add 8 equals

20

Today I scored out of 10.



Week 10 — Day 5

The owl wants 10 pumpkins.

How many does he have?

Owl has

9



How many more does he need?

Owl needs

1

more

① Owl has

1



Owl needs

9

more



② Owl has

8



Owl needs

2

more

③ Owl has

3



Owl needs

7

more



④ Owl has

6



Owl needs

4

more

⑤ Owl has

10



Owl needs

0


more



Today I scored out of 10.


Week 11 — Day 1

Is there an equal number
of turtles and seals?
Tick the right box.




Yes No

1




Yes No

6




Yes No

2




Yes No

7




Yes No

3




Yes No

8




Yes No

4




Yes No

9




Yes No

5



Yes No

10




Yes No

Today I scored out of 10.



Week 11 — Day 2

Circle the two numbers that add up to 10.



1



6



2



7



3



8



4




9



5



10



Today I scored out of 10.


Week 11 — Day 3

Write + or - to
match the word.

Then write
the answer.


$$10 \text{ add } 2 = 10 \boxed{+} 2 = \boxed{12}$$

① 10 subtract 5 = $10 \boxed{-} 5 = \boxed{5}$




② 7 add 13 = $7 \boxed{+} 13 = \boxed{20}$

③ 16 subtract 4 = $16 \boxed{-} 4 = \boxed{12}$



④ 12 add 6 = $12 \boxed{+} 6 = \boxed{18}$

⑤ 19 subtract 10 = $19 \boxed{-} 10 = \boxed{9}$




Today I scored out of 10.

Week 11 — Day 4

Work out the subtraction.

$$10 - 8 = \boxed{2}$$




$$① \quad 7 - 3 = \boxed{4}$$

$$⑥ \quad 13 - 8 = \boxed{5}$$




$$② \quad 9 - 5 = \boxed{4}$$

$$⑦ \quad 19 - 0 = \boxed{19}$$



$$③ \quad 11 - 1 = \boxed{10}$$

$$⑧ \quad 17 - 8 = \boxed{9}$$



$$④ \quad 12 - 0 = \boxed{12}$$

$$⑨ \quad 14 - 10 = \boxed{4}$$

$$⑤ \quad 15 - 6 = \boxed{9}$$

$$⑩ \quad 18 - 9 = \boxed{9}$$





Today I scored out of 10.

Week 11 — Day 5

A seagull takes away 3 chips from the packet.
How many are left?



1



1




2

6




4

2



6

7




7

3



3

8




11

4



0

9




8

5



5

10



13



Today I scored

out of 10.

Week 12 — Day 1

Put the numbers in order.
Start with the biggest.

6 8 1 3

8 6 3 1



1

5 6 2 4

6 5 4 2

6

7 2 3 5

7 5 3 2

2

9 1 8 6

9 8 6 1

7


2 4 9 3

9 4 3 2

3

4 5 7 3

7 5 4 3



8

6 1 5 9

9 6 5 1

4

3 6 2 8

8 6 3 2

9

4 2 8 7

8 7 4 2

5

1 7 4 6

7 6 4 1

10

3 9 1 5

9 5 3 1

Today I scored out of 10.




Week 12 — Day 2

Complete the sentence.
Use the pictures
to help you.



Double 3 is

6



1



Double 1 is

2

5



Double 6 is

12

2



Double 2 is

4

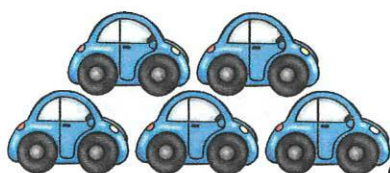
6



Double 8 is

16

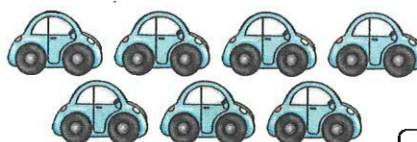
3



Double 5 is

10

7



Double 7 is

14


4



Double 4 is

8

8



Double 9 is


18

Today I scored out of 8.




Week 12 — Day 3



The number of bees in the hive is shown. 4 bees fly away. How many bees are left?



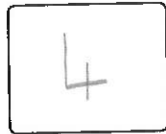
1





6



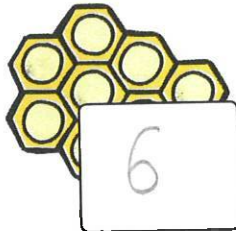

2




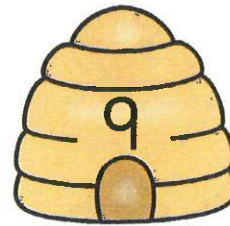
7



3



8



4




9



5



10



Today I scored out of 10.



Week 12 — Day 4

Write the smallest number in words.

5 7 3

three



1

2 4 8

two

6

3 9 1

one

2

6 1 4

one

7

5 7 2

two

3

9 3 5

three

8

8 9 6

six

4

5 8 9

five

9

4 7 9

four

5

7 4 6

four

10

8 5 7

five

Today I scored out of 10.



Week 12 — Day 5

Ryana knits the number of each hat shown. How many hats does she make altogether?



1




17

6

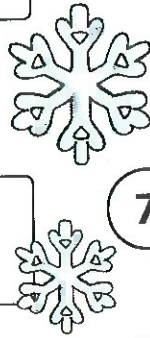


17

2




8



7



3




8

8




11

4



9




14

5



18

10



16



Today I scored out of 10.